

Name: \_\_\_\_\_

Date: \_\_\_\_\_



# Symmetry

<b>25</b>
Suggested Time: 30 min

## Vocabulary

Fill in the blanks. Use the words in the box.

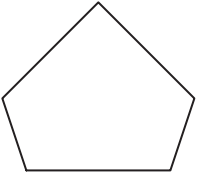
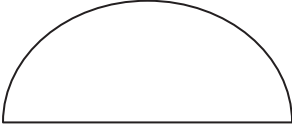
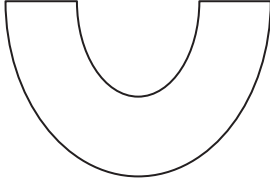
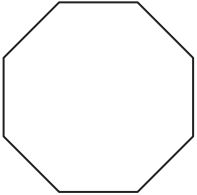
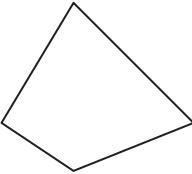
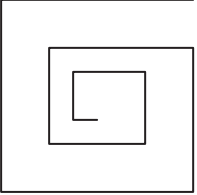
1. A triangle and a square are \_\_\_\_\_.
2. Figures that have the same size and shape are \_\_\_\_\_.
3. A figure when folded along the line of \_\_\_\_\_ creates two matching halves.

congruent  
symmetry  
polygons

## Concepts and Skills

Put a check (✓) under the figures that are not polygons.

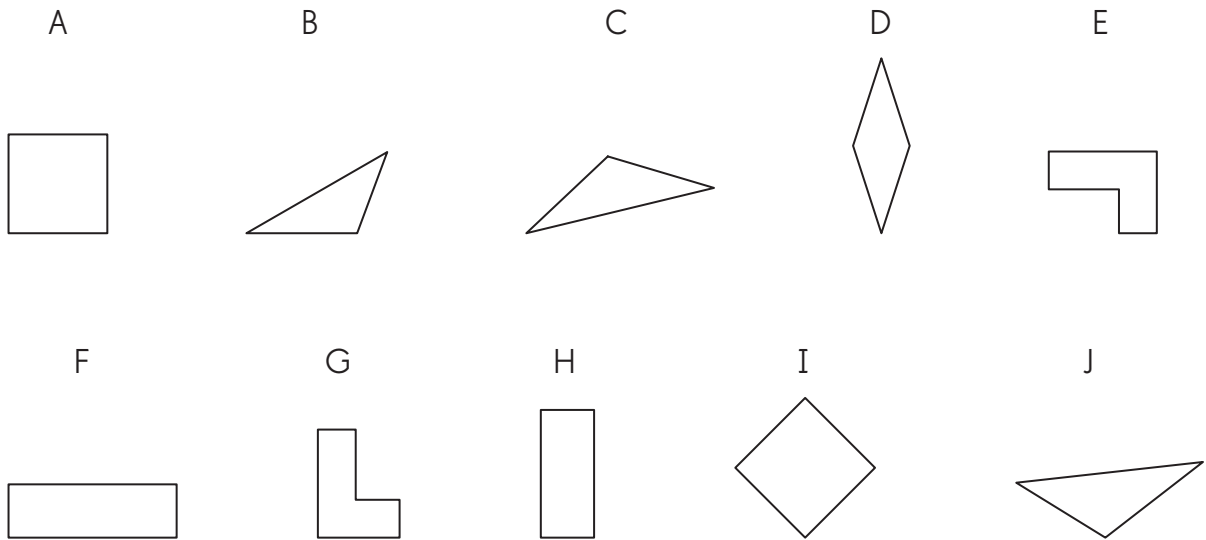
4.

 _____	 _____	 _____
 _____	 _____	 _____

Name: \_\_\_\_\_

Date: \_\_\_\_\_

5. Which pairs of shapes are congruent?



6. Identify the figures that are symmetric.  
Put a check (✓) under the figures that are symmetric.

